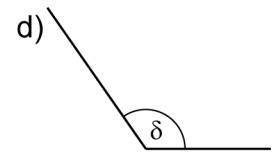
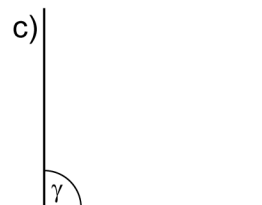
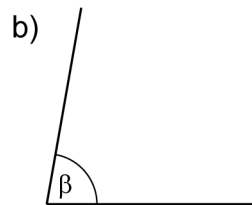
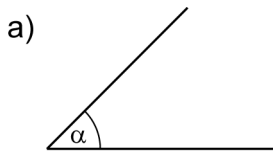
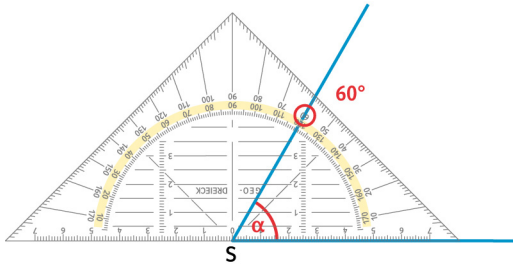


Kreis und Winkel | Fördern

Winkel messen und zeichnen

1 Miss die Winkel wie im Beispiel.

Beispiel:



$\alpha =$ _____

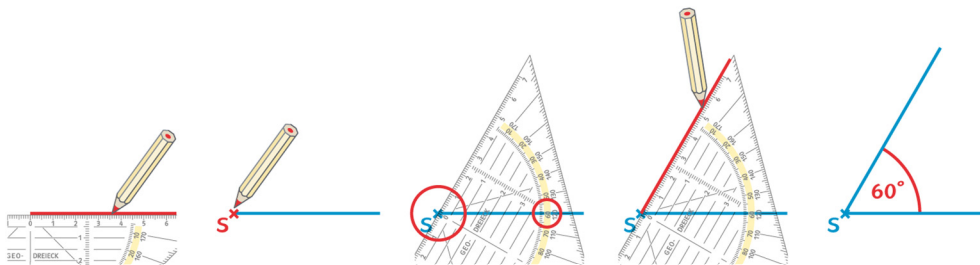
$\beta =$ _____

$\gamma =$ _____

$\delta =$ _____

2 Zeichne die Winkel wie im Beispiel.

Beispiel:



a) $\alpha = 50^\circ$

b) $\beta = 80^\circ$

c) $\gamma = 135^\circ$

Kreis und Winkel | Fördern

Winkel messen und zeichnen – Lösung

1

a) $\alpha = 45^\circ$

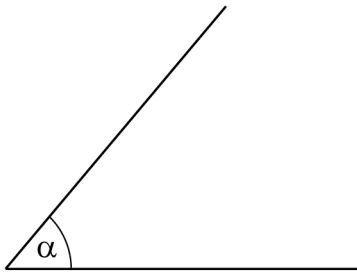
b) $\beta = 80^\circ$

c) $\gamma = 90^\circ$

d) $\delta = 125^\circ$

2

a)



b)



c)

