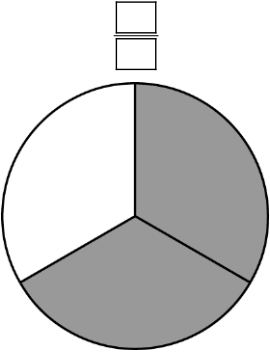
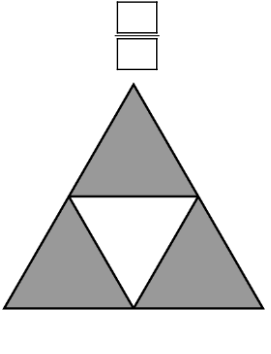
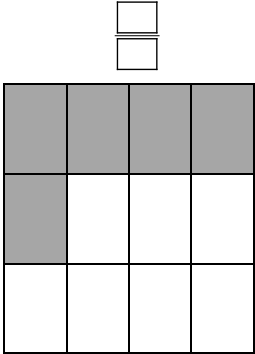
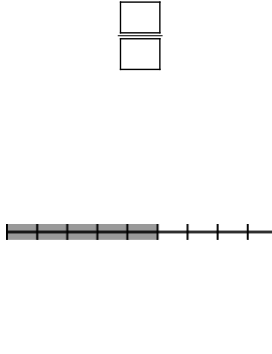

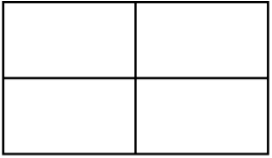
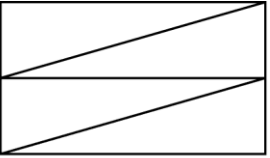


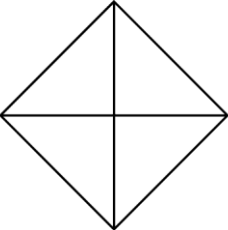
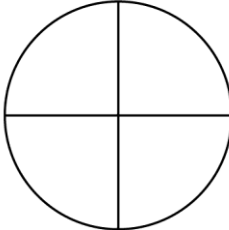
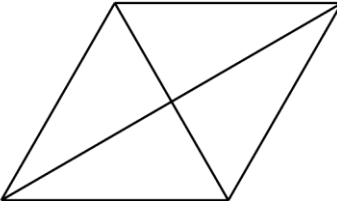
Brüche

1 Welcher Bruchteil ist gefärbt?


a)  b)  c)  d) 

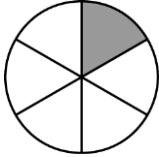
2 Der Bruch $\frac{3}{4}$ soll auf unterschiedliche Arten dargestellt werden. Färbe die Figuren.


  

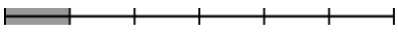
  

3 Stellt die Figur den Bruch $\frac{1}{6}$ richtig dar? Kreuze an.

a)  ja nein

b)  ja nein

c)  ja nein

d)  ja nein

Brüche – Lösung

1

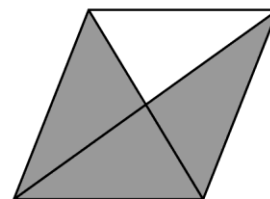
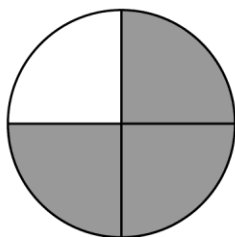
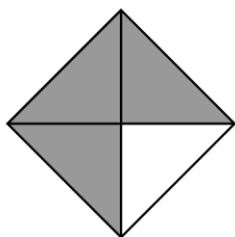
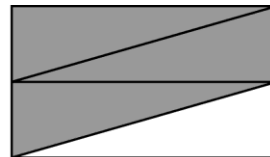

a) $\frac{2}{3}$

b) $\frac{3}{4}$

c) $\frac{5}{12}$


d) $\frac{5}{8}$

2



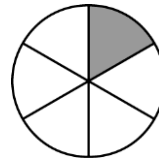
3

a)




- ja
 nein

b)




- ja
 nein

c)



- ja
 nein

d)



- ja
 nein