

Aufgaben

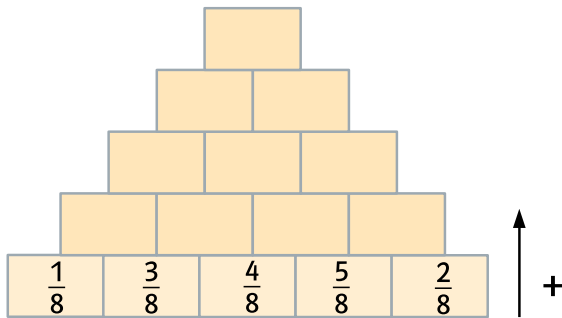
Lerntipp!

Kürze deine Ergebnisse so weit wie möglich.

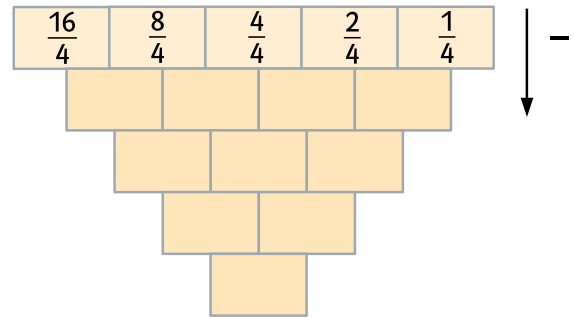
Seite 47

8 Ergänze.

a)



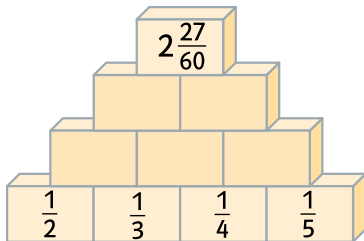
b)



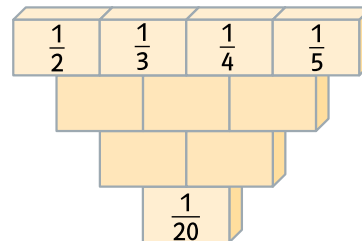
Seite 50

11 Berechne die Bruchmauern. Nach oben wird addiert und nach unten subtrahiert.

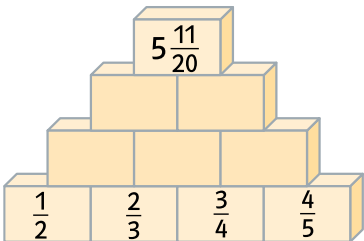
a)



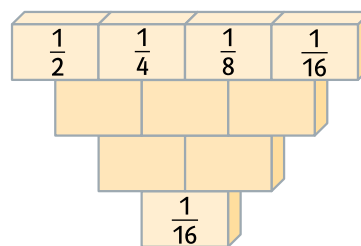
b)



c)



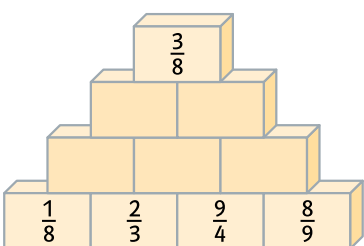
d)



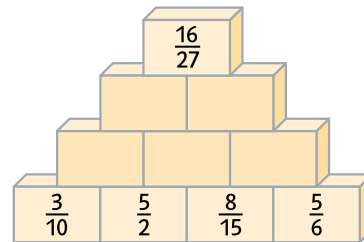
Seite 57

9 Hier wird multipliziert. Der Produktwert steht jeweils in dem Kästchen darüber.

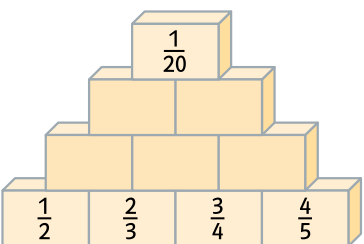
a)



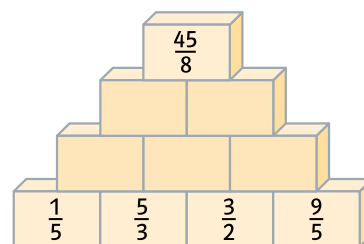
b)



c)



d)

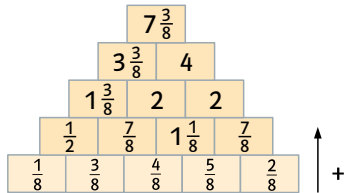


Lösungen

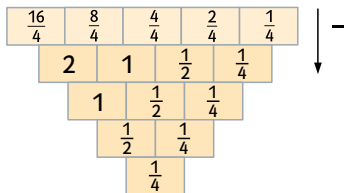
Seite 47

8

a)



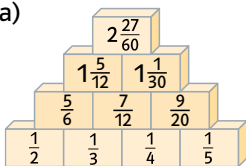
b)



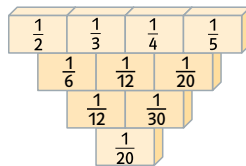
Seite 50

11

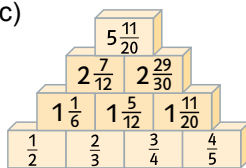
a)



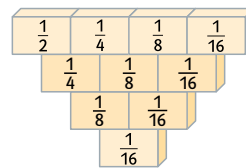
b)



c)



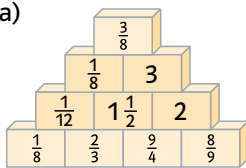
d)



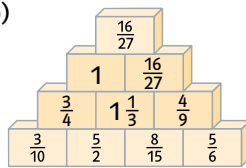
Seite 57

9

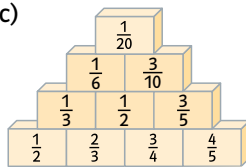
a)



b)



c)



d)

