



### Aufgabe 3

Wie viel sind 100%? Ergänze die Prozentstreifen.


a)




b)




c)



d)



e)



f)

