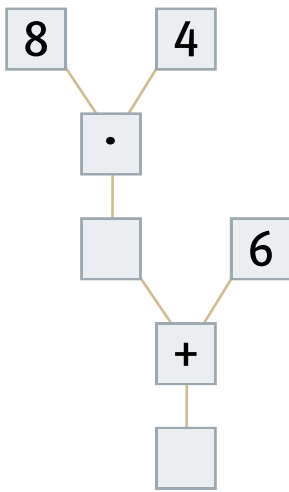


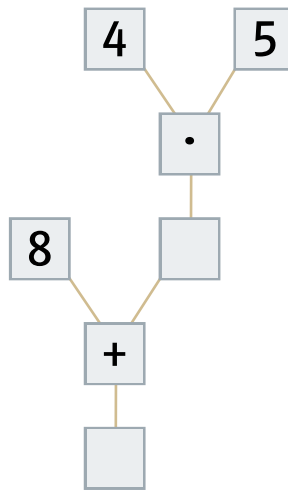
Aufgabe 7

Löse die Aufgabe.

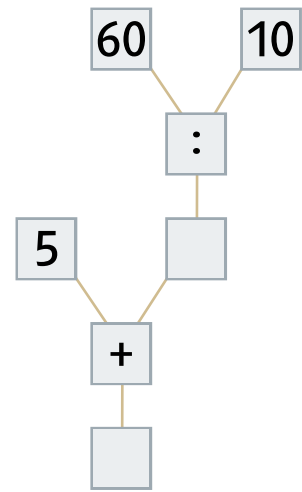
a) $8 \cdot 4 + 6$



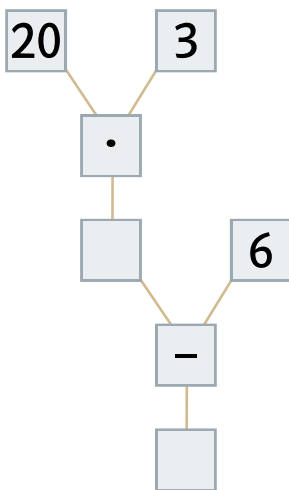
b) $8 + 4 \cdot 5$



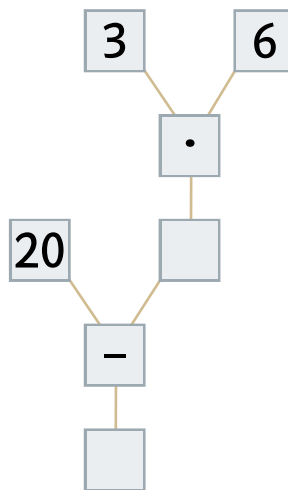
c) $5 + 60 : 10$



d) $20 \cdot 3 - 6$



e) $20 - 3 \cdot 6$



f) $60 - 10 : 5$

