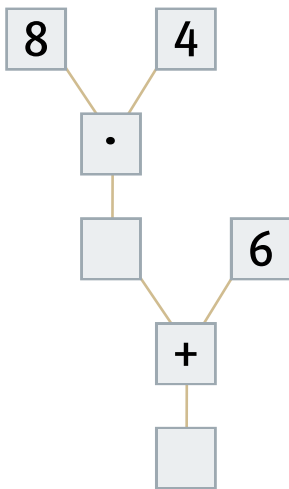


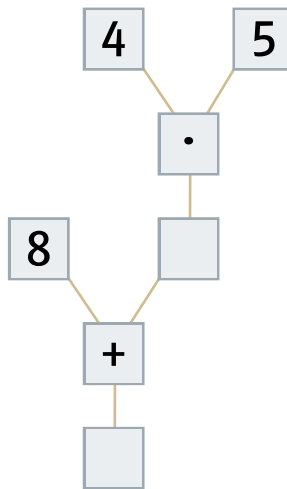
## Aufgabe 7

Löse die Aufgabe.

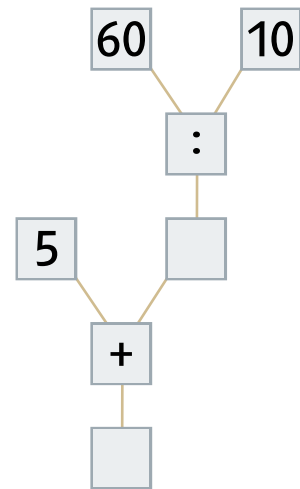
a)  $8 \cdot 4 + 6$



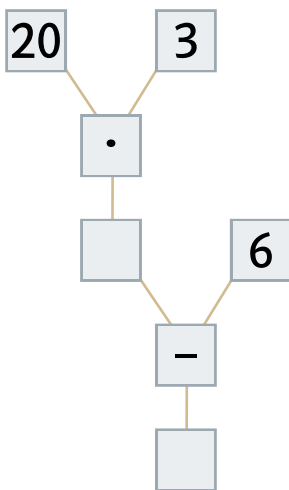
b)  $8 + 4 \cdot 5$



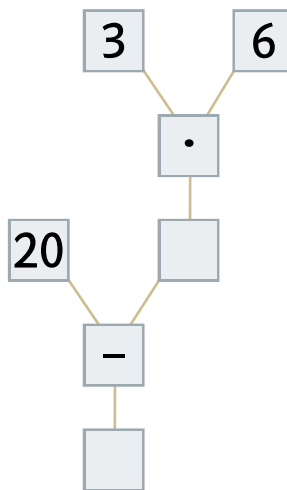
c)  $5 + 60 : 10$



d)  $20 \cdot 3 - 6$



e)  $20 - 3 \cdot 6$



f)  $60 - 10 : 5$

