


Aufgabe 5

Färbe den angegebenen Bruchteil. Vergleiche mit deinem Partner.


a)

$$\frac{3}{6}$$




b)

$$\frac{4}{10}$$




c)

$$\frac{5}{8}$$



d)

$$\frac{8}{14}$$



e)

$$\frac{1}{2}$$

