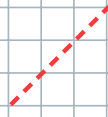
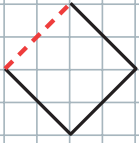


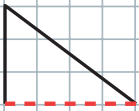
Ähnliche Figuren

Ermittle den Streckfaktor k , mit dem vergrößert oder verkleinert wurde, und ergänze die Bildfigur.


a)



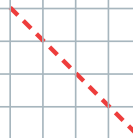
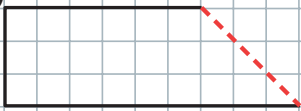
b)



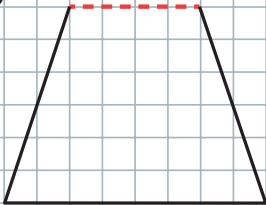
c)



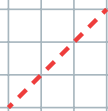
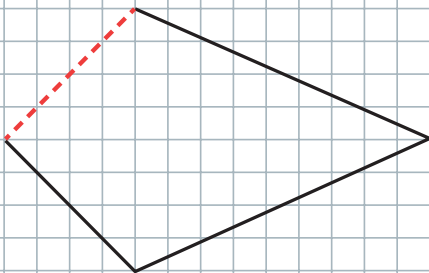
d)



e)



f)



g)

