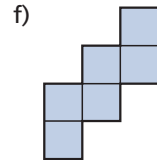
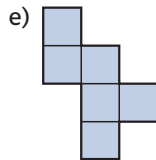
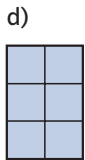
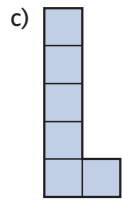
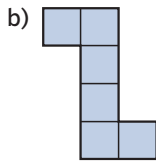
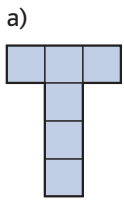


Würfelnetze

3 Welche der folgenden Figuren stellen Würfelnetze dar? Welche nicht?



Schneide die Würfelnetze aus und überprüfe so deine Aussagen.

